

BHARTIYA SHIKSHA BOARD
WORKSHEET – TERM II
MATHEMATICS – CLASS I
SESSION-2025-26

Rajesh Sharma
3/1/26

Time: 1 Hour

Max Marks: 20

GENERAL INSTRUCTIONS:

- Read the questions carefully.
- Please check that this worksheet contains **05** printed pages.
- 10 minutes extra time is allowed to read this worksheet.
- All the answers have to be written in the worksheet only.
- This worksheet contains **09** questions.
- All questions are compulsory.

Q1. Write the missing numbers in the block.

(2×1=2 Marks)

(a)

| | | | | | | |
|----|--|----|--|--|----|--|
| 42 | | 44 | | | 47 | |
|----|--|----|--|--|----|--|

(b)

| | | | | | | |
|----|--|--|----|--|----|--|
| 89 | | | 92 | | 94 | |
|----|--|--|----|--|----|--|




Q2. Circle the heaviest object.

(1 Marks)






Q3. Match the patterns.

(5×1=5 Marks)




Q4. Count and write the numbers.

(3×1=3 Marks)



Q5. Colour the bucket that can hold less water.

(2 Marks)





Q6. Circle the glass with more water.

(1 Mark)




Q7. Colour the biggest object.

(2 Marks)



Q8. Choose the correct word and fill in the blank.

(2 Marks)



Lightest /
Heaviest

The litchi is the _____ fruit.

Q9. Colour the jar that can hold more honey.

(2 Marks)

